


Bassschlüssel C


Datum:.....

1. Benenne bzw. schreibe folgende Töne !




Musical notation for exercise 1. It consists of two staves. The top staff is a treble clef with a common time signature and four measures, each containing a whole rest. The bottom staff is a bass clef with a common time signature and four measures. The first measure contains a whole note G2 (labeled 'a'), the second a whole note F2 (labeled 'd'), the third a whole note E2 (labeled 'ges'), and the fourth a whole note D2 (labeled 'dis').

2. Schreibe folgende Töne in den **Violinschlüssel** um, **eine** Oktave **höher** !



Musical notation for exercise 2. It consists of two staves. The top staff is a treble clef with a common time signature and four measures, each containing a whole rest. The bottom staff is a bass clef with a common time signature and four measures. The first measure contains a whole note G2 (labeled 'a'), the second a whole note F2 (labeled 'b'), the third a whole note E2 (labeled 'c'), and the fourth a whole note D2 (labeled 'd').

3. Schreibe folgende Töne in den **Bassschlüssel** um, **eine** Oktave **tiefer** !



Musical notation for exercise 3. It consists of two staves. The top staff is a treble clef with a common time signature and four measures. The first measure contains a whole note G3 (labeled 'a'), the second a whole note F3 (labeled 'b'), the third a whole note E3 (labeled 'c'), and the fourth a whole note D3 (labeled 'd'). The bottom staff is a bass clef with a common time signature and four measures, each containing a whole rest.